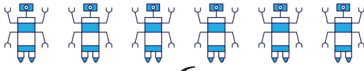



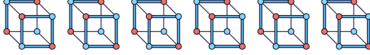



















Phép cộng đến 10(hình ảnh)

Tên: _____

Ngày tháng: _____ Điểm: _____

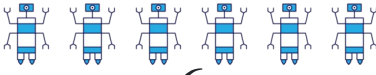



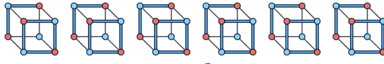












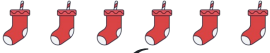


 6	+	 1	=	
 9	+	 1	=	
 6	+	 2	=	
 4	+	 3	=	
 3	+	 7	=	
 4	+	 4	=	
 3	+	 5	=	
 8	+	 1	=	
 3	+	 6	=	
 2	+	 4	=	



Phép cộng đến 10(hình ảnh)

Tên: _____

Ngày tháng: _____ Điểm: _____

 6	+	 1	=	7
 9	+	 1	=	10
 6	+	 2	=	8
 4	+	 3	=	7
 3	+	 7	=	10
 4	+	 4	=	8
 3	+	 5	=	8
 8	+	 1	=	9
 3	+	 6	=	9
 2	+	 4	=	6