



이름: _____









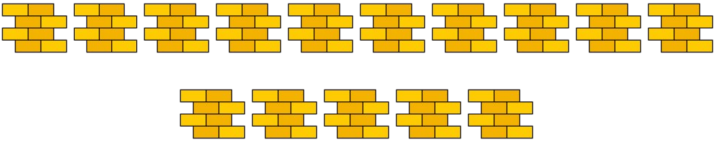

날짜: _____ 점수: _____

	<p>=</p>	
	<p>=</p>	
	<p>=</p>	
	<p>=</p>	
	<p>=</p>	
	<p>=</p>	
	<p>=</p>	
	<p>=</p>	
	<p>=</p>	
	<p>=</p>	



이름: _____

날짜: _____ 점수: _____

	=	20
	=	6
	=	7
	=	17
	=	2
	=	12
	=	5
	=	8
	=	15
	=	1