



이름: _____









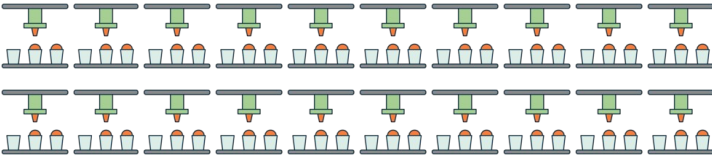

날짜: _____ 점수: _____

	<p>=</p>	
	<p>=</p>	
	<p>=</p>	
	<p>=</p>	
	<p>=</p>	
	<p>=</p>	
	<p>=</p>	
	<p>=</p>	
	<p>=</p>	
	<p>=</p>	



이름: _____

날짜: _____ 점수: _____

	=	3
	=	19
	=	1
	=	9
	=	2
	=	7
	=	16
	=	11
	=	20
	=	4