









# Counting Numbers 1 to 20

Name: \_\_\_\_\_

Date: \_\_\_\_\_ Score: \_\_\_\_\_

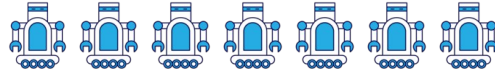
	=	
	=	
	=	
	=	
	=	
	=	
	=	
	=	
	=	
	=	



# Counting Numbers 1 to 20

Name: \_\_\_\_\_

Date: \_\_\_\_\_ Score: \_\_\_\_\_



$= 7$




$= 10$



$= 18$



$= 13$



$= 20$



$= 2$



$= 6$



$= 8$



$= 5$



$= 1$